

## Year 1 Daily Activities

Thursday 16<sup>th</sup> July

Hello boys and girls.

Did you enjoy your Geography lesson? You can find more celebrity supply teachers on the BBC website. They make a change from us don't they?

**Maths:** Don't forget to log in and complete your Mymaths task.

Watch the video for **Week 12** of the White Rose home learning then complete the tasks below. Your focus for today's maths is comparing time.

<https://whiterosemaths.com/homelearning/year-1/>.

**1** Tick the longest time in each set.

a)  1 minute     1 second     1 hour

b)  1 week     1 month     1 day

**2** Tick the shortest time in each set.

a)  1 minute     1 second     1 hour

b)  1 week     1 month     1 day




**3** Write >, < or = to compare the times.

1 day ○ 1 week

7 days ○ 1 week

1 month ○ 1 week

4 Three children ran a race.

<div style="border: 1px solid black; border-radius: 10px; padding: 2px 10px; display: inline-block;">Ron</div>	<div style="border: 1px solid black; border-radius: 10px; padding: 2px 10px; display: inline-block;">Kim</div>	<div style="border: 1px solid black; border-radius: 10px; padding: 2px 10px; display: inline-block;">Sam</div>
		
<div style="border: 1px solid black; border-radius: 10px; padding: 2px 10px; display: inline-block;">65 seconds</div>	<div style="border: 1px solid black; border-radius: 10px; padding: 2px 10px; display: inline-block;">53 seconds</div>	<div style="border: 1px solid black; border-radius: 10px; padding: 2px 10px; display: inline-block;">60 seconds</div>

Complete the sentences.

- a) \_\_\_\_\_ was the fastest.
- b) \_\_\_\_\_ was the slowest.
- c) \_\_\_\_\_ was faster than Sam.









5 Use a stopwatch to compare how long each activity takes.

- Counting to 10
- Writing your name 3 times.
- Building a tower of 10 cubes.

Use these words and phrases.

fastest	slowest	faster than	slower than
---------	---------	-------------	-------------

### Computing:

								
Home	2Dos	Work	Data	Sharing	Teachers	Admin	Help	Alerts

← Home/Computing/2Code

Can you make the magician make some magic?



**English:**

**Adding capital letters and full stops**

# Fast-Talking Aliens

This astronaut has met some aliens on the moon. Unfortunately, there are no full stops or capital letters in alien language so what they are saying doesn't make any sense! Can you add in the full stops and capital letters so that the astronaut can understand them?



**PE. & Exercise:** Try these jumps, challenging someone in your house to do them higher, further or for longer than you.

Fitness Circuit Cards

### Bunny Jumps

Do 10 bunny jumps:

- How far can you travel?
- How high can you jump?
- Can you jump higher or further than your friend?

Fitness Circuit Cards

### Tuck jumps

Do 10 tuck jumps:

- How high can you jump?
- Can you jump higher than your buddy?
- How many tuck jumps can you do without stopping?

Lots of love from Miss Gray, Mrs Sharp and Mrs Wilkinson

