


Good morning, Year 4!

Wow – I can't believe Thursday is here already! I hope you all enjoyed grooving with the Trolls yesterday.

Remember to try your best with the daily activities. Your daily tasks still include: Spellings (via Spelling Shed), MyMaths, TT .Rock Stars and SPAG.com.

Maths



13×7

$3 - 7$

Paris	○ ○ ◐
Cork	○ ○ ○
London	○ ◑
Swansea	○ ○ ◐

Key ○ = 4 hours

How many hours of sunshine did **Paris** have?

Which city had the **least** amount of sunshine?

How many **more** hours of sunshine did **Cork** have than **Swansea**?



www.MyMaths.co.uk

Use the link above to head to the 'MyMaths' homepage. From there, use our school username and password to enter the site. To find your work, you will need to click 'my portal login' to enter your personal username and password. Your tasks should be under the homework tab. You'll find daily tasks set for the week so you can complete them at your own pace.

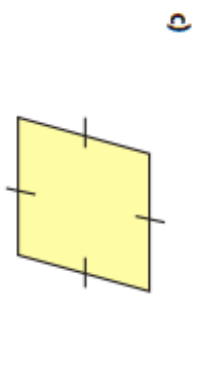
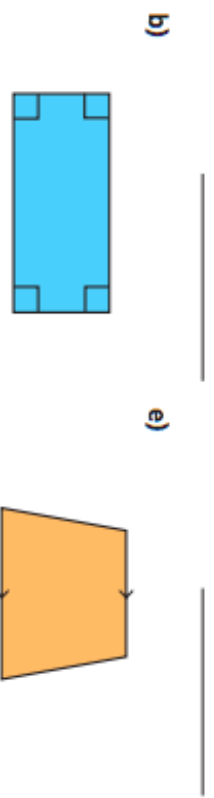
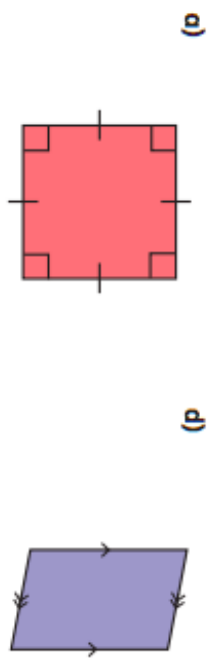
Use this link to find your daily Maths video for today (Week <https://whiterosemaths.com/homelearning/year-4/>)

You'll find your worksheet below. Today's focus is quadrilaterals.

1 Use the word bank to label each quadrilateral.

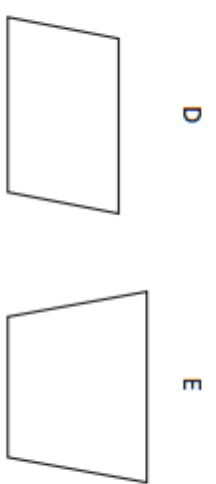
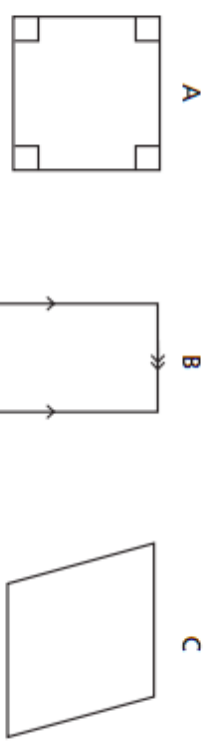
- rhombus
- parallelogram
- trapezium

- rectangle
- square



How did you know which shape was which?

2 Here are some quadrilaterals.



a) Mark any right angles on the shapes.
One shape has been done for you.

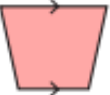
b) Mark any pairs of parallel lines.
One shape has been done for you.

c) Which shapes do not have any right angles?

d) Which shapes have two pairs of parallel lines?

e) Which shapes have four equal sides?

3 Complete the table.


Shape	Polygon?	Number of sides	Number of right angles	Number of pairs of parallel sides	Number of equal sides
	Yes	4	4	2	2 pairs
					2
					
					
					
					

What is the same about all of the shapes?

What is different?

4 Draw the shapes on the grid.

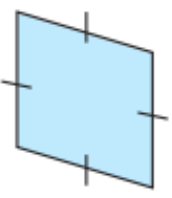
- a) square b) trapezium c) parallelogram



5




This is a square because it has got 4 equal sides.



Do you agree with Rosie? _____

Explain your answer.

6 Complete this Frayer Model to describe a quadrilateral.

My definition	Key characteristics
Example	Non-example
	

Section 1

Can you think of a 'sion' and 'tion' words to answer these clues?

Down: When you're very mixed up- in a state of _____.

Across: Something you feel.

Section 2

Write suitable conjunctions in these sentences:

a. I didn't go out _____ it rained.

b. I will wait for you _____ 9 o'clock.

Section 3

Do you want to hear a secret, Josie?



Can you invent Josie's reply and write it using the correct speech punctuation?


Section 4

Can you turn these words into plurals?

spy _____

jelly _____

dish _____

 coach _____

Section 5


Can you spot the THREE spelling mistakes on Mr. Whoop's to-do list? Can you help him to spell them correctly?

To Do:

Return my book to the library

Go to the swimming pool and exursise

Make a speshial visit to my mum



Section 6

Can you think of an adjective, adverb and preposition beginning with...

	the letter d?	the letter a?
adjective		
adverb		
preposition		

French

Going on Holiday

Keeping Active

GoNoodle

Banana, banana, meatball!

<https://www.youtube.com/watch?v=BQ9q4U2P3ig>



Enjoy your dancing with GoNoodle.

Mrs Ball, Miss Punshon and Miss Cooper xxx

Write a sentence about where you are going on holiday and how. Research the flags and the name for the country in French (Use the internet to help and/or English-French dictionaries). Remember if the country is feminine you say 'en', if it is masculine you say 'au'. Most transport modes use 'en'.

Here is an example of a sentence:

Je vais en France en avion.



Je _____ Je _____ Je _____



Je _____ Je _____ Je _____

Transport choices:

- | | | | |
|----------|------------|------------|----------|
| à vélo | en bateau | à cheval | en avion |
| en train | en autobus | en voiture | à pied |