

Good morning, Year 3!

Wow – I can't believe Thursday is here already! I hope you all enjoyed grooving with the Trolls yesterday.

Remember to try your best with the daily activities. Your daily tasks still include: Spellings (via Spelling Shed), MyMaths, TT .Rock Stars and SPAG.com.

Maths



$3,000 + 60$

A grid for the calculation 3,000 + 60. A rectangular box is provided for the answer.

$12 \div 1$

A grid for the calculation 12 ÷ 1. A rectangular box is provided for the answer.

- A ruler cost 40p
- A protractor cost 35p
- A pencil cost 27p
- A pen cost 10p

James buys one ruler, one protractor, one pencil and one pen.

Work out the total cost?

How much change should he get from £2?



Look at the four digit cards above

You can only use each digit once.

Create the largest possible two digit **even** number

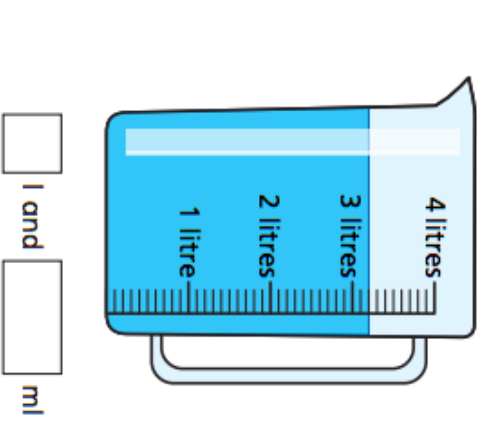
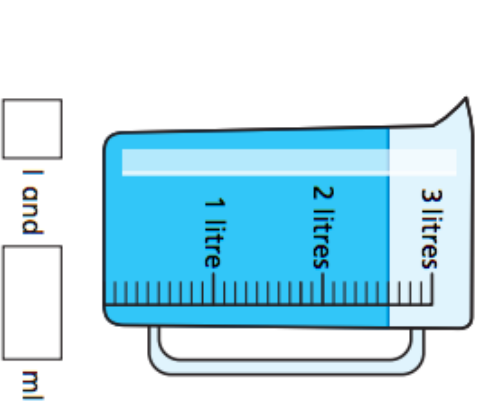
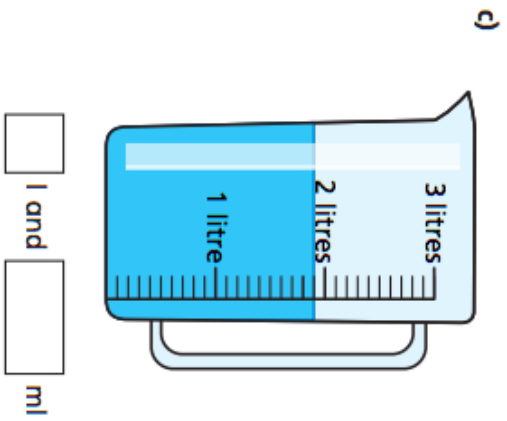
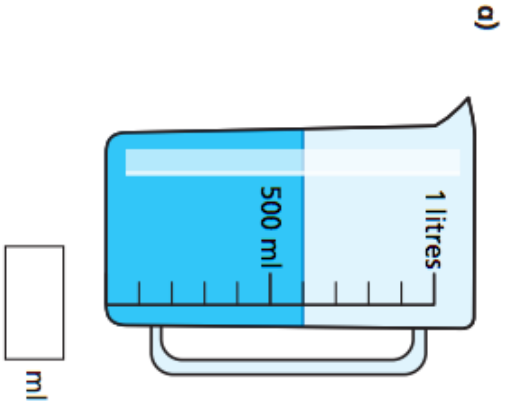


www.MyMaths.co.uk

Use the link above to head to the 'MyMaths' homepage. From there, use our school username and password to enter the site. To find your work, you will need to click 'my portal login' to enter your personal username and password. Your tasks should be under the homework tab. You'll find daily tasks set for the week so you can complete them at your own pace.

You'll find your worksheet below. Today's focus is measuring capacity.

1 How much water is there in each jug?

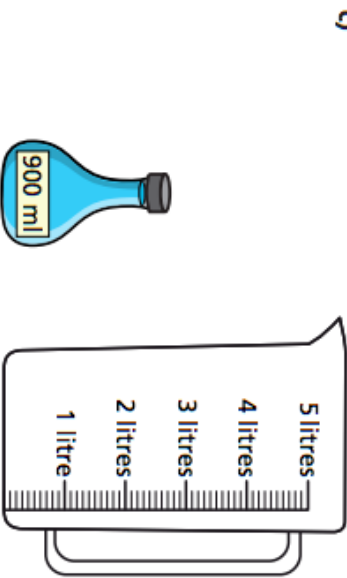
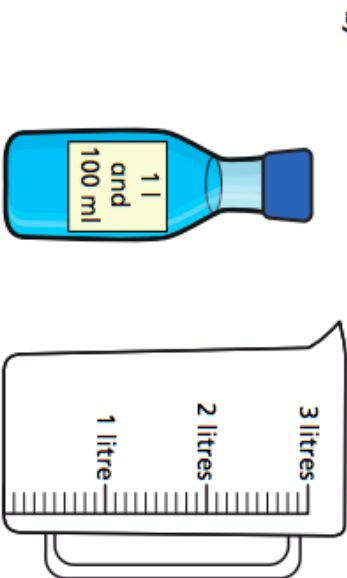



2 The capacity of each bottle is shown on the label.

Each bottle is full of liquid.

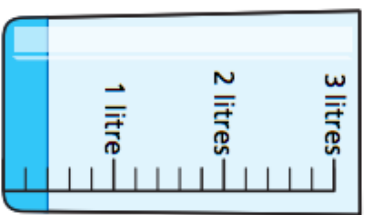
The bottles are emptied into jugs.

Draw a line on each jug to show where the liquid will reach.



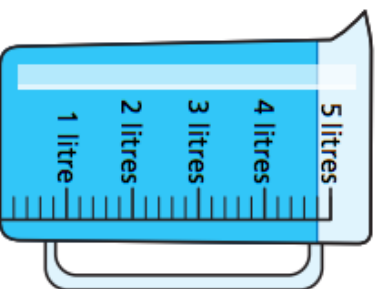
3 How much water is there in each container?

a)



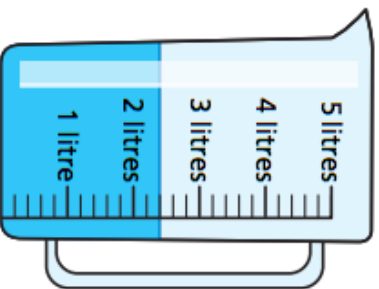
ml

c)



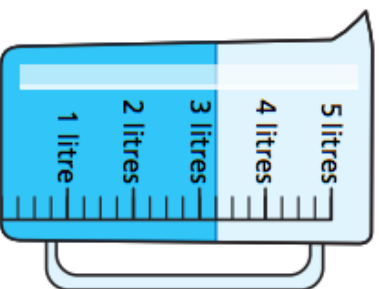
l and ml

b)



l and ml

d)



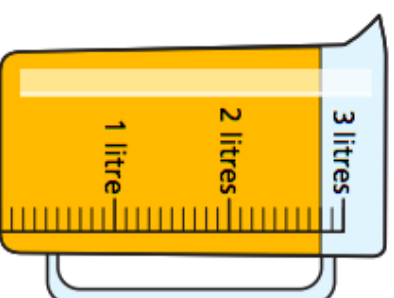
l and ml

How did you work out what each interval on the scales represents?

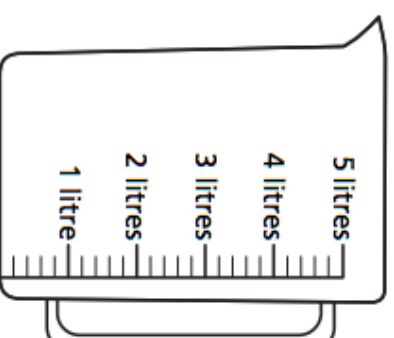
4 Mo has some orange juice in a jug.

He pours it into another jug.

Draw a line on the jug to show where the orange juice will reach.



What do you notice?



5

Different bottles hold different amounts of liquids.



Dexter



Eva




Who has more liquid? Circle your answer.

Dexter

Eva

they have the same

Section 1

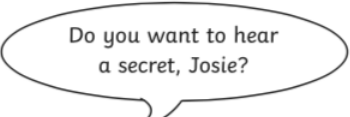


Can you think of a 'sion' and 'tion' words to answer these clues?

Down: When you're very mixed up- in a state of _____.

Across: Something you feel.

Section 3



Can you invent Josie's reply and write it using the correct speech punctuation?

Section 5

Can you spot the THREE spelling mistakes on Mr. Whoop's to-do list? Can you help him to spell them correctly?

To Do:

Return my book to the library

Go to the swimming pool and exursise

Make a speshial visit to my mum



Section 2

Write suitable conjunctions in these sentences:

a. I didn't go out _____ it rained.

b. I will wait for you _____ 9 o'clock.

Section 4

Can you turn these words into plurals?

spy _____

jelly _____

dish _____



coach _____

Section 6

Can you think of an adjective, adverb and preposition beginning with...

	the letter d?	the letter a?
adjective		
adverb		
preposition		

French

Going on Holiday

Write a sentence about where you are going on holiday and how. Research the flags and the name for the country in French (Use the internet to help and/or English-French dictionaries).

Remember if the country is feminine you say 'en', if it is masculine you say 'au'. Most transport modes use 'en'.

Here is an example of a sentence:

Je vais en France en avion.



Je _____ Je _____ Je _____



Je _____ Je _____ Je _____

Transport choices:

à vélo

en bateau

à cheval

en avion

en train

en autobus

en voiture

à pied

Keeping Active

GoNoodle

Banana, banana, meatball!

<https://www.youtube.com/watch?v=BQ9q4U2P3ig>



Enjoy your dancing with GoNoodle.

Mrs Ball, Miss Punshon and Miss Cooper xxx

One more day!