

Year 4 – Class Activities

Monday 13th July

Good morning, Year 4!

Wow! It's the last week!

We never thought that our last week would be spent like this and we would all much rather be together; however, let's not dwell on things and instead we will make the most of our last week's home learning before the summer holidays.

Remember to try your best with the daily activities. Your daily tasks still include: Spellings (via Spelling Shed), MyMaths, TT.Rock Stars and SPAG.com.

Maths



$$- 20 = 384$$

$$240 \div 3$$

Megan made a jump of three and a half metres.

Olivia's jump was 5 centimetres shorter.

How far did Olivia jump?

Sophia bought 2 apples and 5 bananas for £2.80

Apples cost 63p.

How much does **one** banana cost?



www.MyMaths.co.uk

Use the link above to head to the 'MyMaths' homepage. From there, use our school username and password to enter the site. To find your work, you will need to click 'my portal login' to enter your personal username and password. Your tasks should be under the homework tab. You'll find daily tasks set for the week so you can complete them at your own pace.

You'll find your worksheet below. Today's focus is identifying angles.

1

Complete the sentences.

Use the word bank to help you.

- 90 180 greater less

a) A right angle is degrees.

b) An acute angle is _____ than degrees.

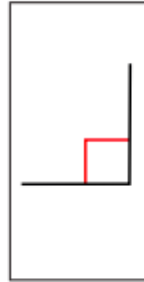
c) An obtuse angle is _____ than degrees but less than degrees.

2

Match the angles to the labels.



right angle



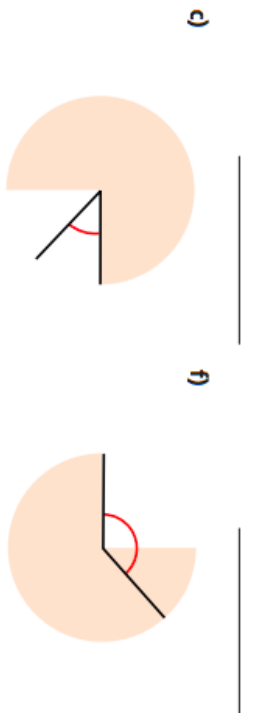
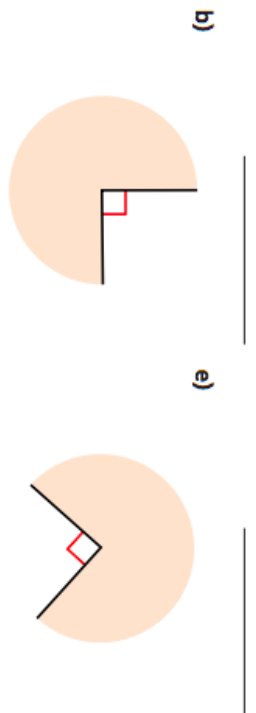
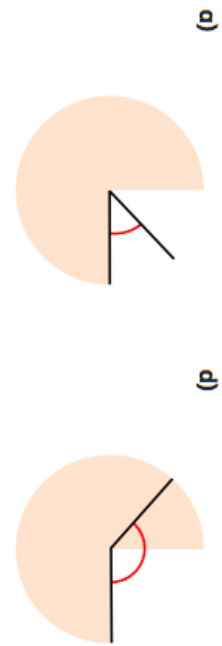
acute angle



obtuse angle

3

Label the angles: acute, obtuse or right angle.



4

Tick all the acute angles.



5 Tick all the obtuse angles.



8



Angle B is obtuse because it's bigger than the right angle.

A B



6 Label the angles: acute, obtuse or right angle.

a) _____ c) _____



b) _____ d) _____



9

Are the statements always true, sometimes true or never true? Explain your answer.

a) An obtuse angle is a greater turn than an acute angle.

b) An acute angle is a greater turn than a right angle turn.

c) If you turn through two acute angles you will have turned through an obtuse angle.

7 Is the angle acute, obtuse or a right angle?

- a) 35° _____
- b) 99° _____
- c) 90° _____
- d) 89° _____
- e) 121° _____
- f) 179° _____

English

Read the text then answer the following questions:

1. Who is stopping Emma from getting a puppy?
2. Why do you think that the author describes dad as 'boring'?
3. What makes you think that Emma is not ready to get a puppy? Use evidence from the text to back up your answer.
4. Summarise the main point of this story in 20 words or less.



Emma's Puppy Problem

As soon as she turned eight years old, Emma knew that she was old enough for the responsibility of looking after a puppy. She had even promised to start doing all of the things you would do with a dog to prove to her boring dad that she could. Emma knew she had to go on long walks twice a day, although she did not get out of bed before midday. She watered the plants in the house every day to prove that she could keep something alive, although she watered them a bit too much. Emma also knew one thing for certain: she would not be picking up anything that the dog left in the back garden. Not once. Not ever. That was her dad's job.



Cartoon Buildings

Try to create a cartoon style drawing of your home or school building. Soften the edges, add some curves and use block colours. You don't need to include as much detail or shading details for this style.

Have fun!

Keeping Active

Use the link to find the GoNoodle dance to the water cycle song – for those of you in Byron, I hope this brings back memories of our Science and Topic learning. Enjoy!

<https://www.youtube.com/watch?v=KM-59IjA4Bs>

Have a lovely day!

Mrs Ball, Miss Cooper and Miss
Punshon

xxx

