

Year 3 – Class Activities

Monday 13th July


Good morning, Year 3!

Wow! It's the last week!

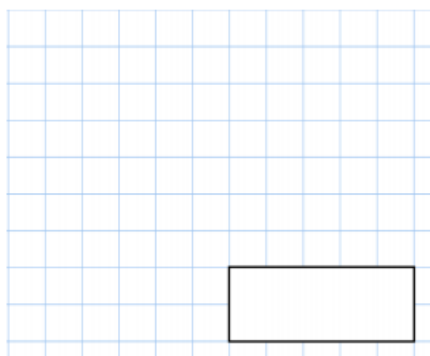
We never thought that our last week would be spent like this and we would all much rather be together; however, let's not dwell on things and instead we will make the most of our last week's home learning before the summer holidays.

Remember to try your best with the daily activities. Your daily tasks still include: Spellings (via Spelling Shed), MyMaths, TT.Rock Stars and SPAG.com.

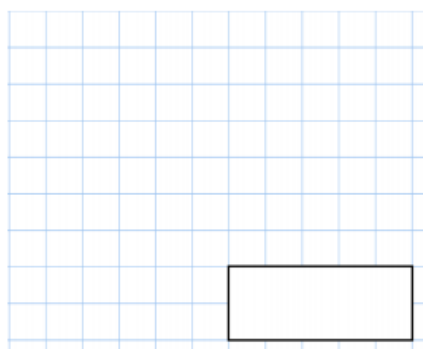
Maths



$$501 - 4$$



$$\frac{1}{2} \text{ of } 26$$



These are the opening times at a village library

	opening times
Monday	4pm to 6pm
Tuesday	closed
Wednesday	9am to 6pm
Thursday	7am to 10am
Friday	9am to 11am
Saturday	8am to 11am
Sunday	closed

On which day does the library open at 8am?

On which days is the library closed?

Circle **three** numbers which **add** to make **170**

10 30 50 90 120 150



www.MyMaths.co.uk

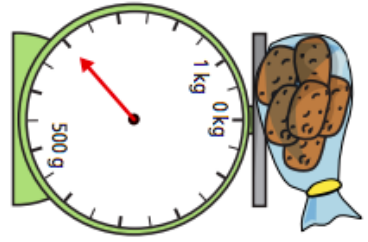
Use the link above to head to the 'MyMaths' homepage. From there, use our school username and password to enter the site. To find your work, you will need to click 'my portal login' to enter your personal username and password. Your tasks should be under the homework tab. You'll find daily tasks set for the week so you can complete them at your own pace.

Use this link to find your daily Maths video for today (Week 11).
<https://whiterosemaths.com/homelearning/year-3/>

You'll find your worksheet below. Today's focus is measuring mass.

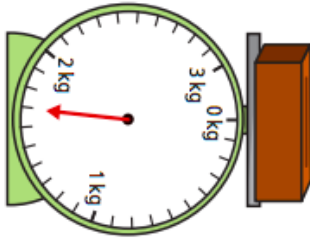
1 What is the mass of each object?

a)



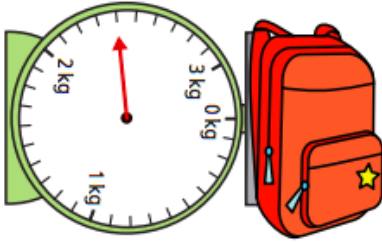
g

b)



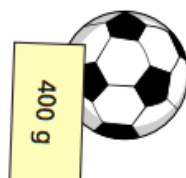
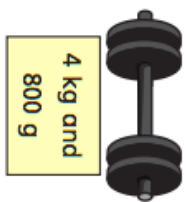
kg and g

c)



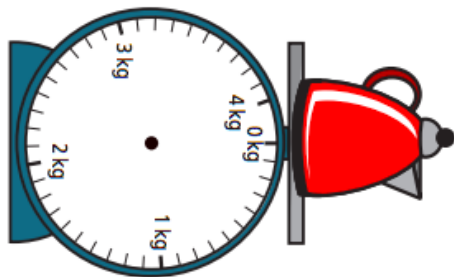
kg and g

2 The mass of each object is shown on the label.

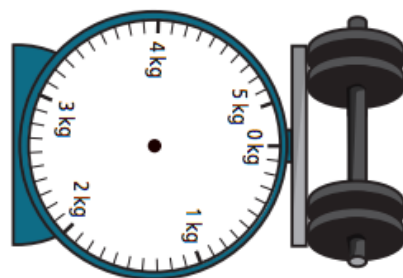


Draw on the scales to show the mass of each object.

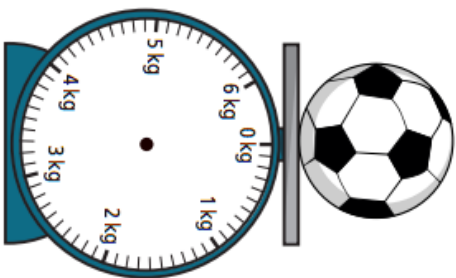
a)



b)



c)



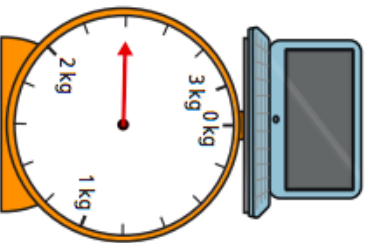
3 What is the mass of each object?

a)



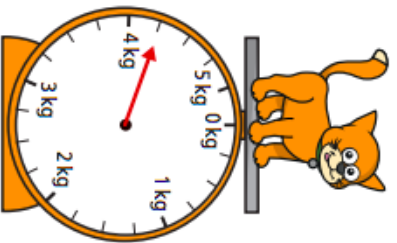
g

b)



kg and g

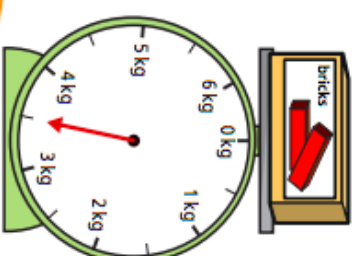
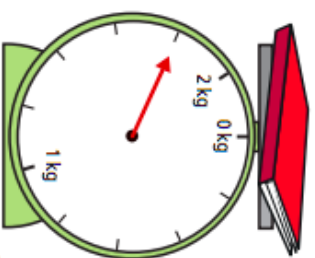
c)



kg and g

How did you work out what each interval on the scales represents?

4 Whitney is weighing some objects.



The book weighs more than the toy bricks because the arrow goes further round.

Do you agree with Whitney? _____
Why?

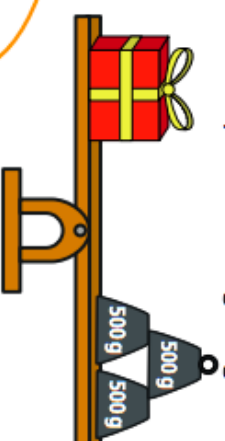
5 Amir and Annie each have a present.

They are working out the mass of their presents using weights.



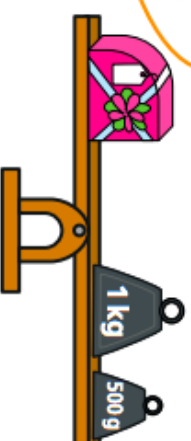
Our presents weigh the same.

Amir



No they do not. Mine is heavier because it weighs more than one kilogram.

Annie




Who is correct? _____

How do you know? _____

English

Read the text then answer the following questions:

1. Who is stopping Emma from getting a puppy?
2. Why do you think that the author describes dad as 'boring'?
3. What makes you think that Emma is not ready to get a puppy? Use evidence from the text to back up your answer.
4. Summarise the main point of this story in 20 words or less.



Emma's Puppy Problem

As soon as she turned eight years old, Emma knew that she was old enough for the responsibility of looking after a puppy. She had even promised to start doing all of the things you would do with a dog to prove to her boring dad that she could. Emma knew she had to go on long walks twice a day, although she did not get out of bed before midday. She watered the plants in the house every day to prove that she could keep something alive, although she watered them a bit too much. Emma also knew one thing for certain: she would not be picking up anything that the dog left in the back garden. Not once. Not ever. That was her dad's job.



Cartoon Buildings

Try to create a cartoon style drawing of your home or school building. Soften the edges, add some curves and use block colours. You don't need to include as much detail or shading details for this style.

Have fun!

Keeping Active

Use the link to find the GoNoodle dance to the water cycle song – for those of you in Byron, I hope this brings back memories of our Science and Topic learning. Enjoy!

<https://www.youtube.com/watch?v=KM-59IjA4Bs>

Have a lovely day!

Mrs Ball, Miss Cooper and Miss
Punshon

xxx

