

Reception Activities - Monday 13th July



Morning boys and girls! I cannot believe that this is the last week of the school year! I wish we were spending it all together. This week we are thinking about our year in Reception, re-capping some activities in Maths and reading some of our favourite stories from across the year - enjoy!

So, here are today's jobs for you to keep your brains and hands busy:

Literacy: This week we are thinking about ourselves, completing an 'All about Me' sheet and thinking about our favourite Reception memories. Today we are starting with the 'All about Me' sheet.

Name	<u>All about me!</u>		Age
Me (Draw a picture)		Area of the classroom	
Animal	Colour	When I grow up	Friend

On my sheet, I made hand and footprints out of paint and then wrote the numbers 2020 in them. You could also draw around your hands and feet and colour them in. Next I would like you to fill in 3 of the boxes. I wrote these sentences:

My fayvrit animal is an elifant.

My fayvrit culir is pirpl.

My best frend is Gemma.

Which 3 boxes will you write in today? Keep your work safe for tomorrow!

Can you also look through your sound book? If an adult says the sounds can you write them from memory? Practise any that you find tricky!



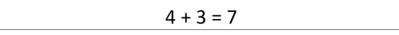
Maths: Today's job is practising adding. Remember you can do this using toys (or sweets!!) or a number line. Ask a grown-up to write 10 sums for you. Some of you will be adding within 10 and some within 20. Have a try at these:




Addition	
$6 + 0 = \square$	$9 + 6 = \square$
$6 + 1 = \square$	$8 + 6 = \square$
$6 + 2 = \square$	$7 + 6 = \square$
$6 + 3 = \square$	$6 + 6 = \square$
$6 + 4 = \square$	$5 + 6 = \square$
$6 + 5 = \square$	$4 + 6 = \square$
$6 + 6 = \square$	$3 + 6 = \square$
$6 + 7 = \square$	$2 + 6 = \square$
$6 + 8 = \square$	$1 + 6 = \square$
$6 + 9 = \square$	$0 + 6 = \square$




Name _____ Date _____




ADDITION SENTENCES TO 10 SHEET 4




Write the addition sentence that matches each picture.




1)  +  = 
 $4 + 3 = 7$

2)  +  = 
 _____ + _____ = _____

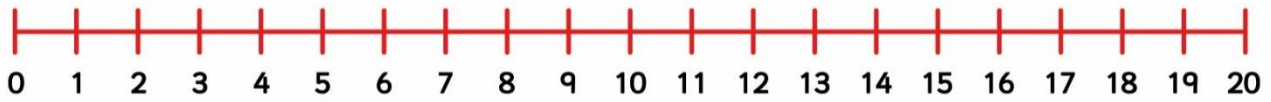
3)  +  = 
 _____ + _____ = _____

4)  +  = 
 _____ + _____ = _____

5)  +  = 
 _____ + _____ = _____

6)  +  = 
 _____ + _____ = _____

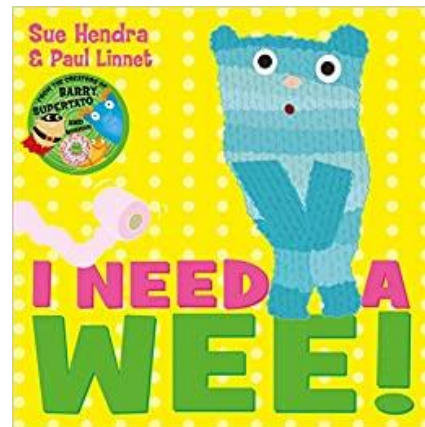
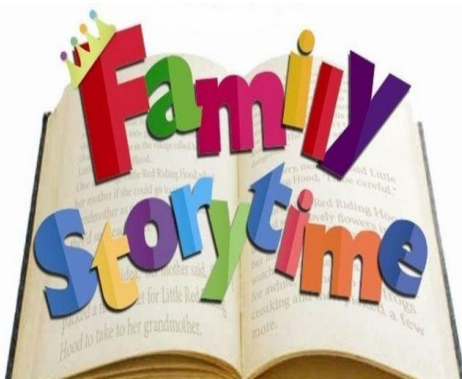
Try using a number line to complete these like the one below:



edtech
www.edtech.co.uk

Story Time: The children who have returned to school have chosen all of this week's stories. They tried to think of all the stories we enjoyed most this year. Today we would like you to read this story or listen to it on Youtube. We think your grown-ups will find it as funny as we do!

<https://www.youtube.com/watch?v=urm6CDXDpBU>



Today's Activity: Today's activity is the 'All about Me' homework task. It's on the website or you can find it below:

Share with a grow-up 5 things you can do in Maths that you could not do at the beginning of Reception. I can think of lots! Counting to 20, counting to 100, counting in 10's, counting in 2's, writing numbers correctly, finding a number 1 more and 1 less, adding and taking-away, knowing which 2 numbers make 10, telling the time, naming and describing 2D and 3D shapes, talking about weight, length, time and capacity, making a repeating pattern and much more! Which 5 will you show off to your grown-up?



© Can Stock Photo - csp28659131

Don't forget we're missing you all so much!

Lots of love, Mrs Robson, Mrs Taylor & Mrs Woods xxxxx